

# Homework 12

---

Hand in: \_\_\_\_\_

Do not use a calculator for questions 1-6. You must show all your working out where the question number is **underlined**. For these questions stating an answer without showing a written method will not score a mark.

<p><b><u>1.</u></b> Two items cost £1.25 and £1.45, what is the total cost?</p>	<p><b><u>2.</u></b> A bag of sweets cost 59p. You pay with 1 coin. How much change do you receive?</p>
<p>3. <math>8 \times 11 =</math></p>	<p>4. <math>12 \div 3 =</math></p>

**5.**

What is  $\frac{1}{8}$  of 40?

**6.**

Write 7.5cm in millimetres.

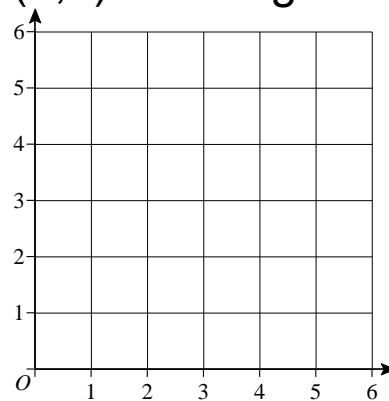
**7.**

What time is shown on the clock?



**8.**

Plot (6,1) on the grid.



**9.**

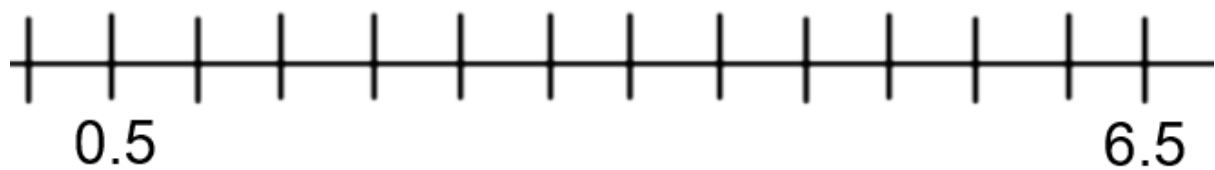
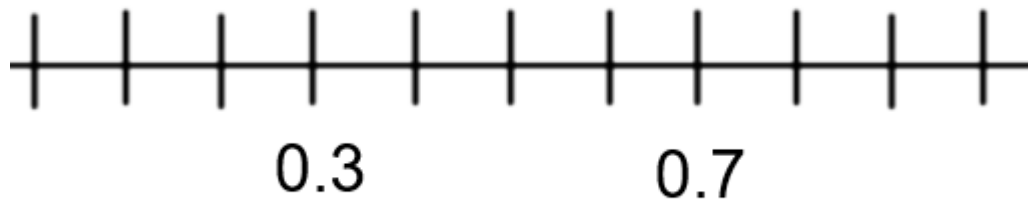
What is 50% of 80?

**10.**

Write 90% as a fraction

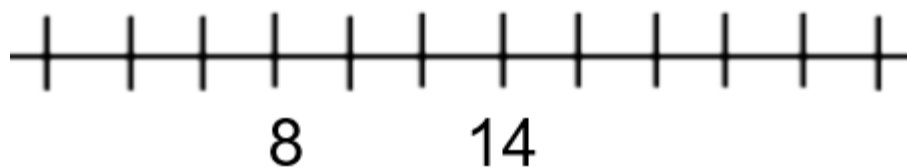
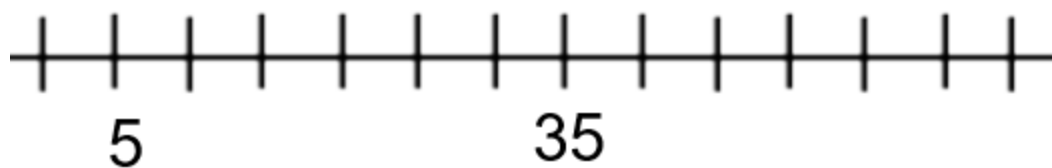
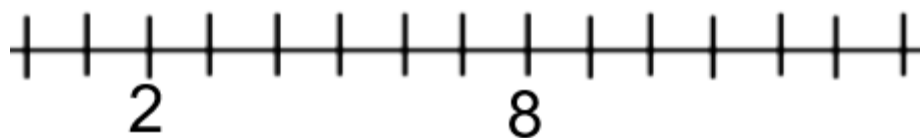
## Gold:

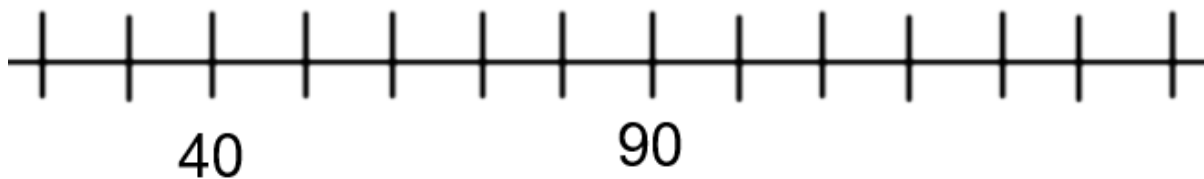
Complete the number lines. Labelling every marked point.



## Silver:

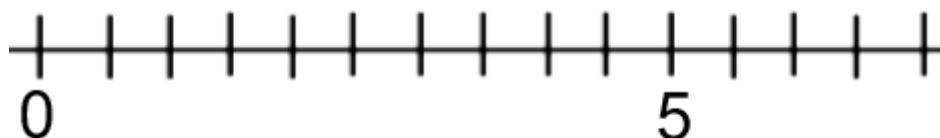
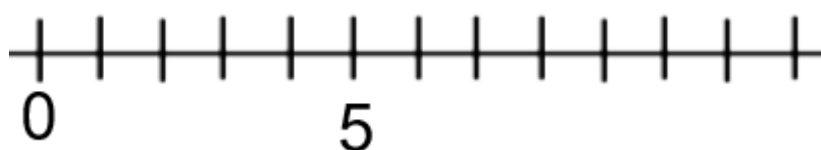
Complete the number lines. Labelling every marked point.





## Bronze:

Complete the missing whole numbers on the number lines



The scales below weigh up to 1kg and are labelled every 100g.

Draw markers on the scales to show the weights

600g



250g

